

5.16 Euler method for differential equations

Consider the differential equation

$$\frac{dy}{dx} = x - y^2,$$

with initial condition $y(1.3) = 2.35$. Suppose we want to approximate the value of $y(2.2)$ rounded up to four significant figures, and using steps of size $h = 0.1$.

5.16.1 Input the sequences

We want to iterate over the x 's and the y 's. The Euler method tells us to choose the sequences defined by





$$x_{n+1} = x_n + 0.1 \tag{1}$$

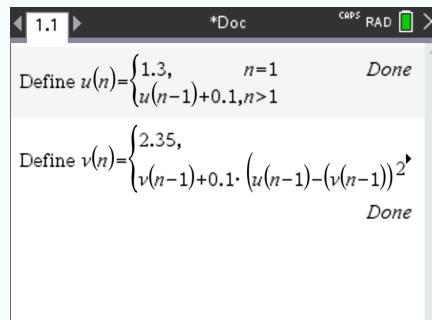
$$y_{n+1} = y_n + 0.1 \cdot (x_n - y_n^2) \tag{2}$$

The initial condition tells us that we start with x_1 and y_1 . Here, $x_1 = 1.3$ and $y_1 = 2.35$ (because $y(x_1) = 2.35$).



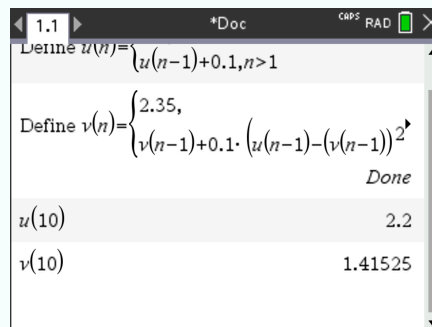
In the TI-Nspire, sequences are written $u(n)$ and $v(n)$ and not x_n and y_n . Thus in the following lines “ $u(n)$ ” will mean “ x_n ” (so for example $u(2) = x_2 = 1.4$), and “ $v(n)$ ” will mean “ y_n ”.

- ① Create a new document, press  and select Add Calculator.
- ② Press , select Actions > Define.
- ③ Type $u(n) =$, press  and select .
- ④ On the first line, write the initialization. On the second line, write the recursive expression.
- ⑤ Do the same for $v(n)$



5.16.2 Find the result asked

Since it is asked to compute $y(2.2)$, we read $u(10) = 2.2$ (recall that $u(10)$ is x_{10}), so our answer is $v(10) = 1.42$ (since $v(10)$ is y_{10} and Euler method tells us that $y_{10} \approx y(x_{10})$):



Thus, $y(2.2) \approx 1.42$.